

Lighthouse P2 (Checkpoint 1)

1. Fill in this **addition** grid

+	6	3	4
5			
14			

2. Fill in this **multiplication** grid

×	2	3	5
3			
7			

3. What are the missing numbers?

a) $18 = \square + 3$

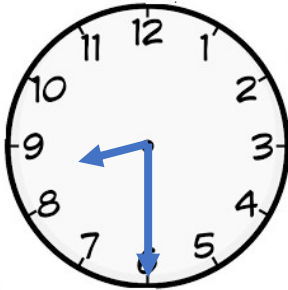
b) $16 = \bigcirc - 7$

4. Put these numbers into the table **3, 8, 9, 12, 18**

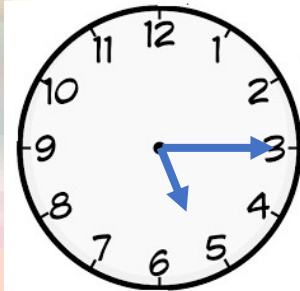
ODD	EVEN

5. What time do these clocks say?

a)



b)




6. What are these fractions?

a)



b)



7. What numbers do these show?

a)



b)

