

## Lighthouse P3 (Checkpoint 1)

1. Fill in this **addition** grid

+	1	10	100
653			
879			

2. Fill in this **multiplication** grid.

×	3	4	8
6			
7			

3. a)  $43 + 36$       b)  $87 + 54$       c)  $91 - 53$

4. Work out the missing numbers

a)  $6 \times \bigcirc = 30$

b)  $18 \div \square = 3$

c)  $\diamond \div 4 = 8$

5. a) Write 793 in words.

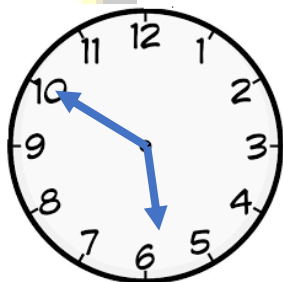
b) Write **three hundred and seven** in numbers

6. a)  $\frac{2}{7} + \frac{4}{7}$

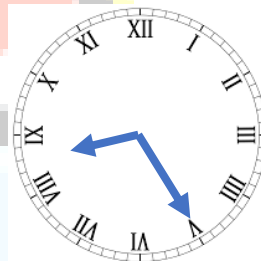
b)  $\frac{7}{10} - \frac{6}{10}$

7. What time do the clocks say?

a)

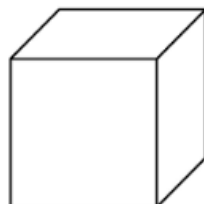


b)



8. Name these solids

a)



b)

