

## Lighthouse P3 (Checkpoint 3)

1. Fill in this **addition** grid

+	1	10	100
341			
289			

2. Fill in this **multiplication** grid.

×	3	4	8
6			
7			

3. a)  $38 + 22$       b)  $19 + 59$       c)  $96 - 48$

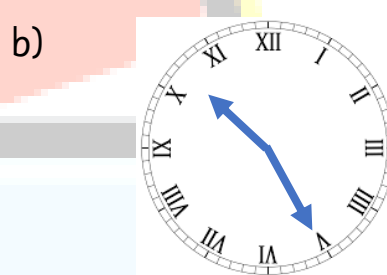
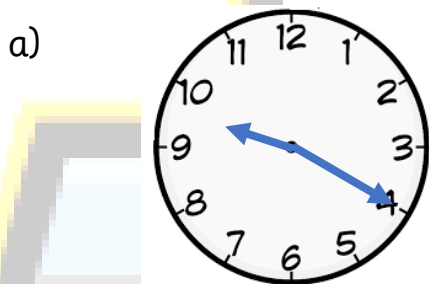
4. Work out the missing numbers

a)  $6 \times \bigcirc = 18$       b)  $56 \div \square = 7$       c)  $\diamond \div 4 = 9$

5. a) Write 702 in words.  
b) Write **six hundred and six** in numbers

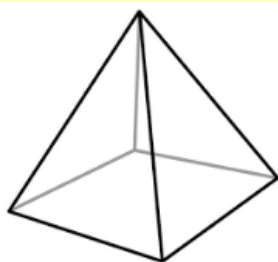
6. a)  $\frac{1}{5} + \frac{2}{5}$       b)  $\frac{7}{9} - \frac{5}{9}$

7. What time do the clocks say?



8. Name these solids

a)



b)

