

Lighthouse P3 (Checkpoint 6)

1. Fill in this **addition** grid

+	1	10	100
758			
799			

2. Fill in this **multiplication** grid.

×	3	4	8
8			
6			

3. a) $19 + 23$ b) $49 + 36$ c) $71 - 39$

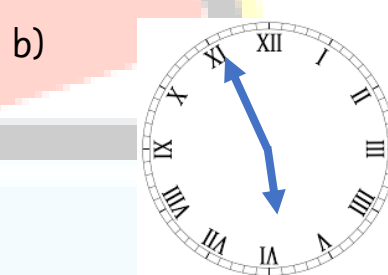
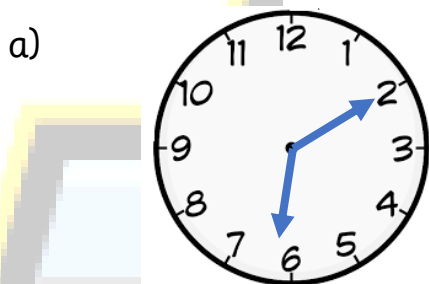
4. Work out the missing numbers

a) $8 \times \bigcirc = 24$ b) $36 \div \square = 4$ c) $\diamond \div 8 = 6$

5. a) Write 655 in words.
b) Write **three hundred and ninety** in numbers

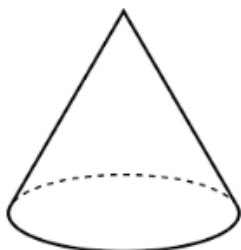
6. a) $\frac{3}{5} + \frac{1}{5}$ b) $\frac{9}{10} - \frac{3}{10}$

7. What time do the clocks say?



8. Name these solids

a)



b)

