

Lighthouse P1 (Checkpoint 1)

1. Fill in this **addition** grid

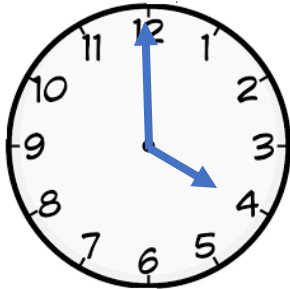
+	5	6	4
4			
7			

2. Fill in this multiplication grid

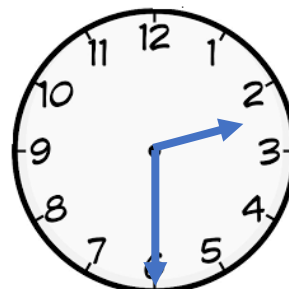
×	2	5	10
3			
7			

3. What time do the clocks say?

a)



b)




4. What numbers are missing?

a) $\square + 3 = 10$

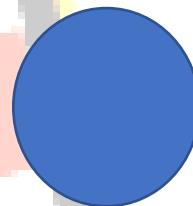
b) $\bigcirc + 7 = 16$

5. Name these shapes

a)

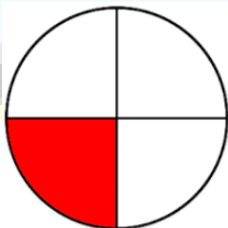


b)

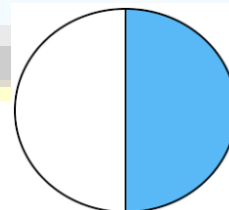


6. Name the fractions

a)



b)



7. What does the "2" stand for in 27?