

Lighthouse P1 (Checkpoint 2)

1. Fill in this **addition** grid

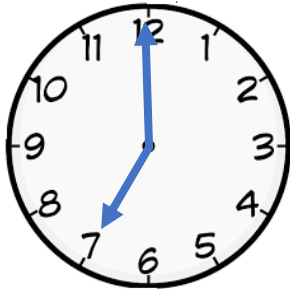
+	3	6	8
5			
4			

2. Fill in this multiplication grid

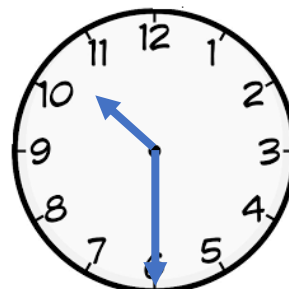
×	2	5	10
8			
3			

3. What time do the clocks say?

a)



b)




4. What numbers are missing?

a) $\square + 7 = 10$


b) $\bigcirc + 9 = 14$

5. Name these shapes

a)

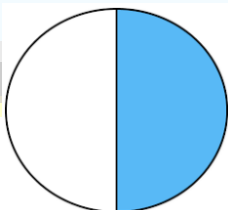


b)

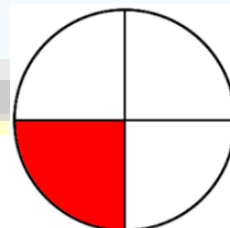


6. Name the fractions

a)



b)



7. What does the "3" stand for in 37?