

Lighthouse P1 (Checkpoint 3)

1. Fill in this **addition** grid


+	2	7	9
6			
5			

2. Fill in this multiplication grid

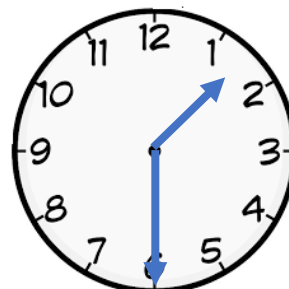
×	2	5	10
4			
9			

3. What time do the clocks say?

a)



b)




4. What numbers are missing?

a) $\square + 4 = 11$

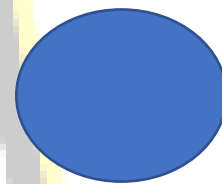
b) $\bigcirc + 3 = 15$

5. Name these shapes

a)

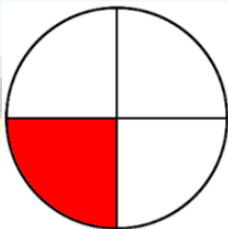


b)

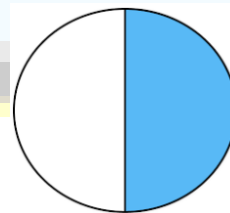


6. Name the fractions

a)



b)



7. What does the "5" stand for in 52?