

## Lighthouse P1 (Checkpoint 5)

1. Fill in this **addition** grid

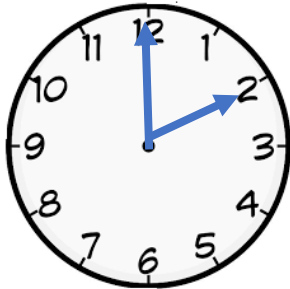
+	3	6	8
4			
7			

2. Fill in this multiplication grid

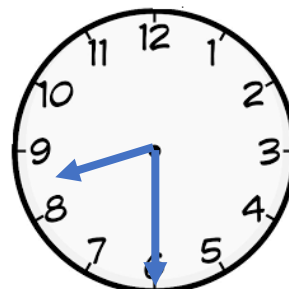
×	2	5	10
4			
7			

3. What time do the clocks say?

a)



b)




4. What numbers are missing?

a)  $\square + 7 = 11$

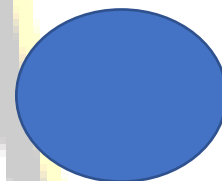
b)  $\bigcirc + 4 = 12$

5. Name these shapes

a)

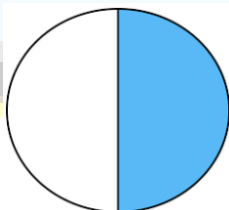


b)

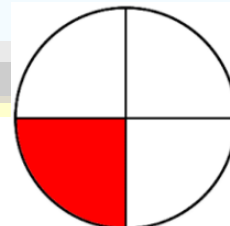


6. Name the fractions

a)



b)



7. What does the "4" stand for in 49?