

## Lighthouse P1 (Checkpoint 6)

1. Fill in this **addition** grid

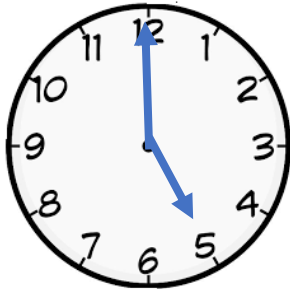
+	2	5	9
5			
6			

2. Fill in this multiplication grid

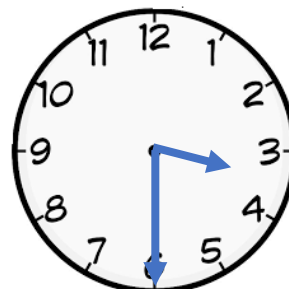
×	2	5	10
6			
8			

3. What time do the clocks say?

a)



b)



4. What numbers are missing?

a)  $\square + 5 = 12$

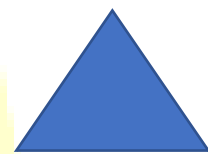
b)  $\bigcirc + 9 = 16$

5. Name these shapes

a)

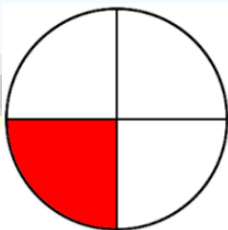


b)

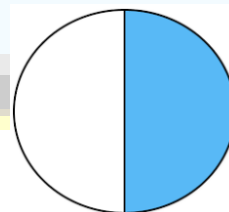


6. Name the fractions

a)



b)



7. What does the "2" stand for in 29?