

## Lighthouse P2 (Checkpoint 2)

1. Fill in this **addition** grid

+	7	4	6
6			
13			

2. Fill in this **multiplication** grid

×	2	3	5
8			
4			

3. What are the missing numbers?

a)  $15 = \square + 3$

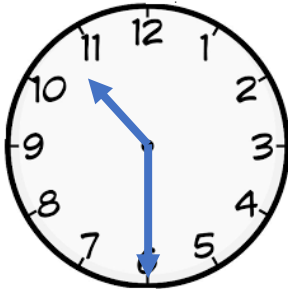
b)  $11 = \bigcirc - 3$

4. Put these numbers into the table **5, 10, 11, 16, 14**

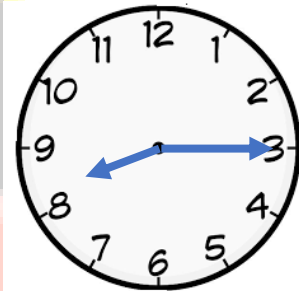
ODD	EVEN

5. What time do these clocks say?

a)

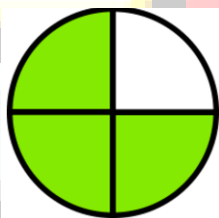


b)

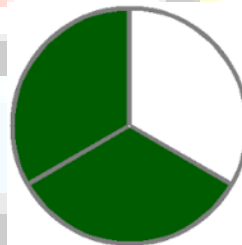


6. What are these fractions?

a)



b)



7. What numbers do these show?

a)



b)

