

Lighthouse P2 (Checkpoint 4)

1. Fill in this **addition** grid

+	9	2	11
7			
5			

2. Fill in this **multiplication** grid

×	2	3	5
7			
3			

3. What are the missing numbers?

a) $12 = \square + 10$

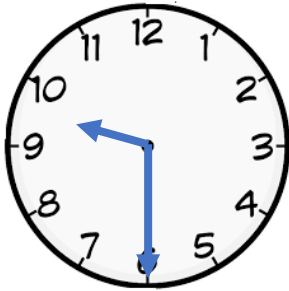
b) $11 = \bigcirc - 3$

4. Put these numbers into the table **6, 9, 4, 14, 17**

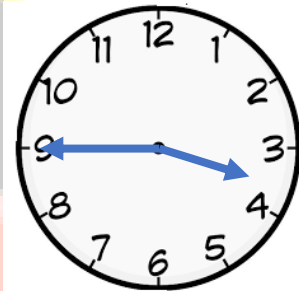
ODD	EVEN

5. What time do these clocks say?

a)



b)

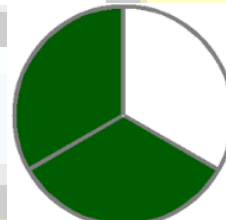


6. What are these fractions?

a)



b)



7. What numbers do these show?

a)



b)

