

Lighthouse P2 (Checkpoint 6)

1. Fill in this **addition** grid

+	9	3	5
4			
11			

2. Fill in this **multiplication** grid

×	2	3	5
7			
3			

3. What are the missing numbers?

a) $17 = \square + 3$

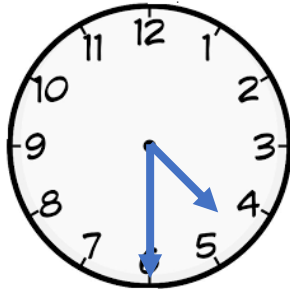
b) $14 = \bigcirc - 2$

4. Put these numbers into the table **4, 9, 12, 16, 17**

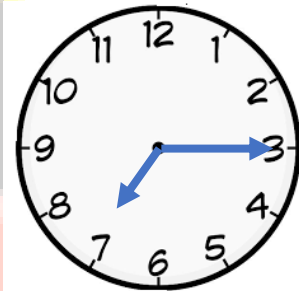
ODD	EVEN

5. What time do these clocks say?

a)

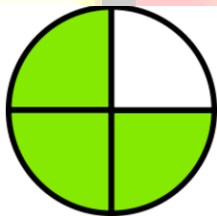


b)

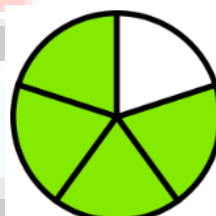


6. What are these fractions?

a)



b)



7. What numbers do these show?

a)



b)

